









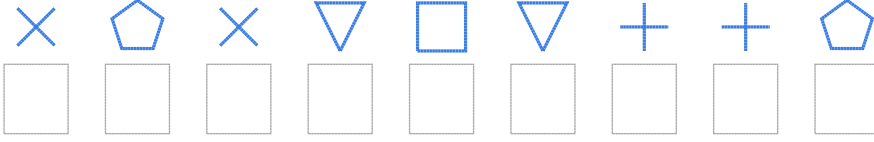


# Şekil Sayı Eşleştirme

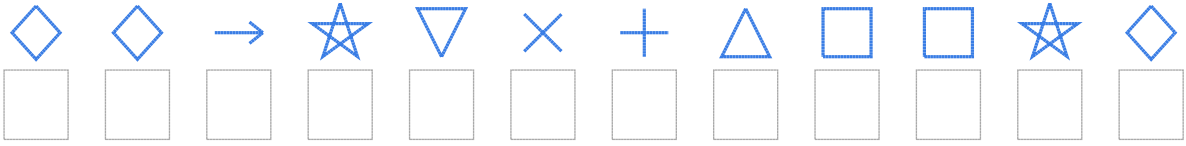
									
= 5	= 0	= 1	= 4	= 8	= 2	= 9	= 3	= 7	= 6

Aşağıdaki uzun şifreleri hatasız çözerek altlarına yazın:

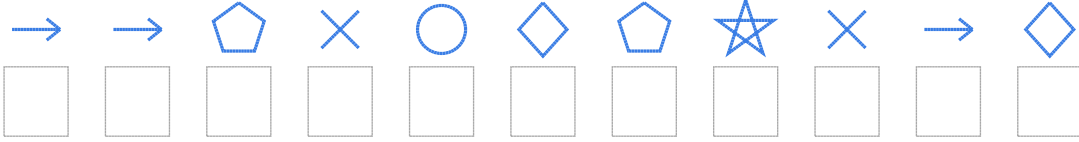
1. Şifre



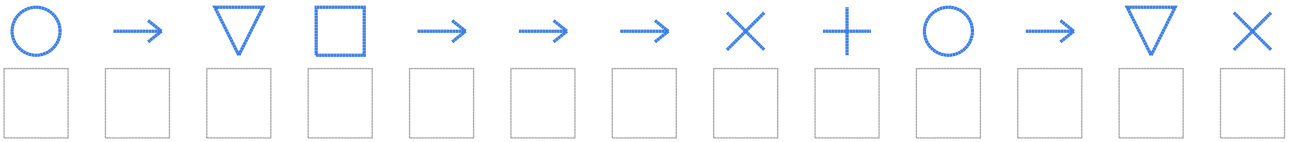
2. Şifre



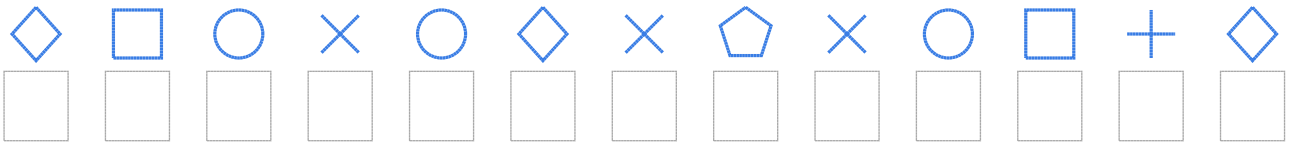
3. Şifre



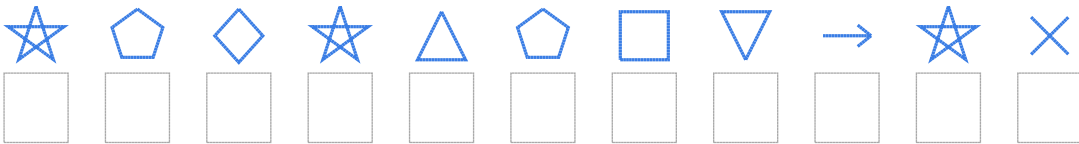
4. Şifre



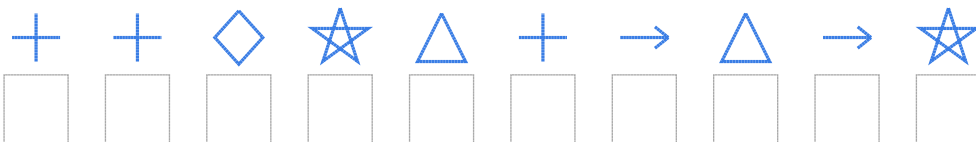
5. Şifre



6. Şifre



7. Şifre



□ BONUS: 6. ve 2. şifrenin üçüncü rakamının toplamı kaçtır? .....

## Cevap Anahtarı

1. Şifre: 262171006
2. Şifre: 339512047753
3. Şifre: 99628365293
4. Şifre: 8917999208912
5. Şifre: 3782832628703
6. Şifre: 56354671952
7. Şifre: 0035409495

□ Bonus Soru Cevabı: 12